





Use the array provided to solve each problem.


1) $16 \times 10 =$




2) $10 \times 12 =$




3) $10 \times 19 =$




4) $10 \times 17 =$



5) $15 \times 10 =$



6) $10 \times 18 =$



Answers

1. _____

2. _____

3. _____

4. _____

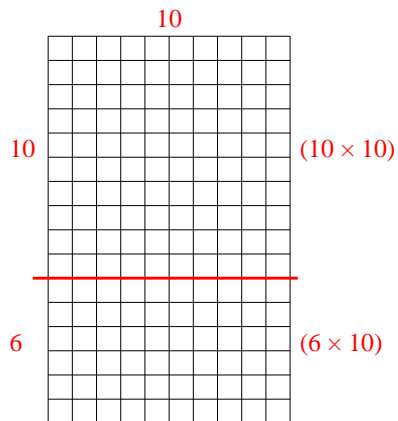
5. _____

6. _____

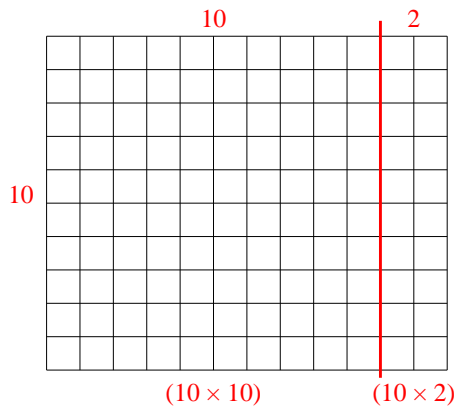


Use the array provided to solve each problem.

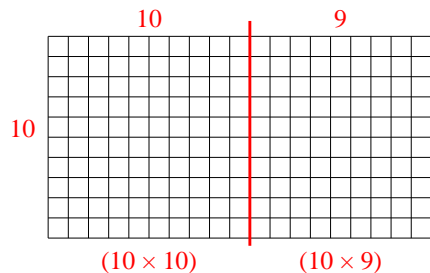
1) $16 \times 10 =$



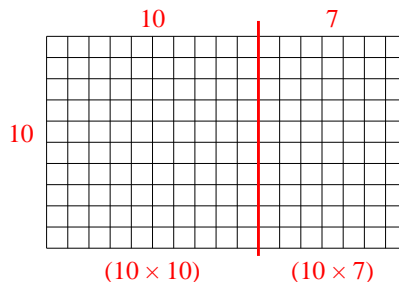
2) $10 \times 12 =$



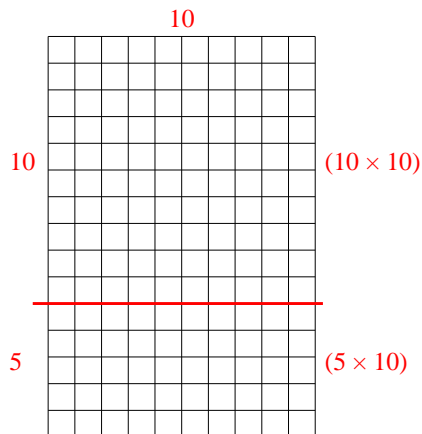
3) $10 \times 19 =$



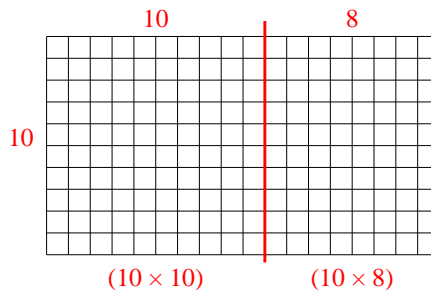
4) $10 \times 17 =$



5) $15 \times 10 =$



6) $10 \times 18 =$



Answers

1. **160**

2. **120**

3. **190**

4. **170**

5. **150**

6. **180**